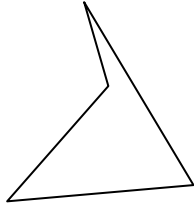




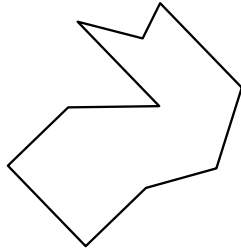
Identify the type of shape shown.

Answers

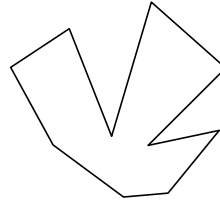
1)



2)



3)



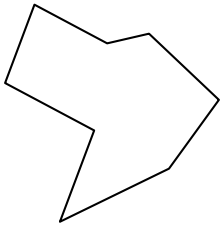
1. _____

2. _____

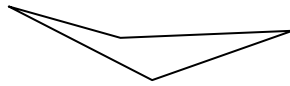
3. _____

4. _____

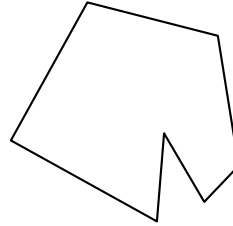
4)



5)



6)



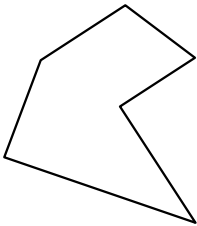
5. _____

6. _____


7. _____

8. _____

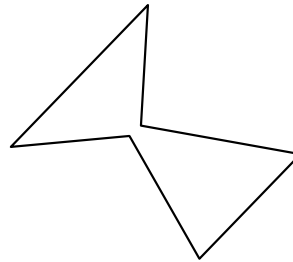
7)



8)



9)



9. _____

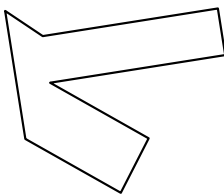
10. _____

11. _____

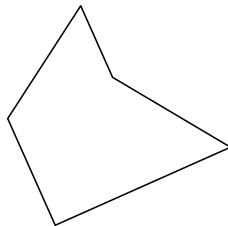
12. _____

13. _____

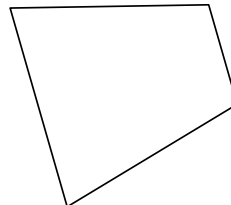
10)



11)



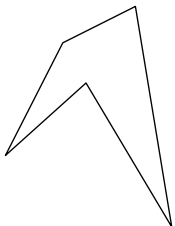
12)



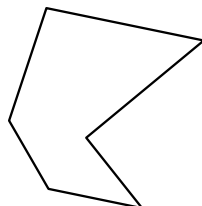
14. _____

15. _____

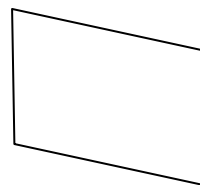
13)



14)



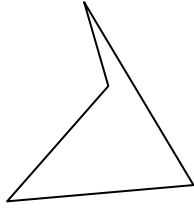
15)



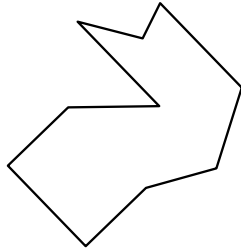


Identify the type of shape shown.

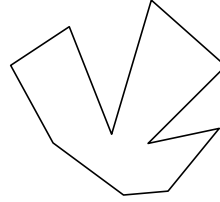
1)



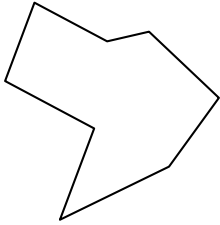
2)



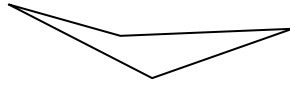
3)



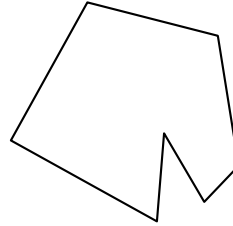
4)



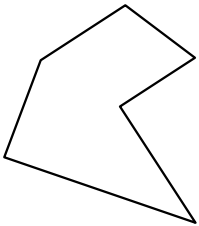
5)




6)



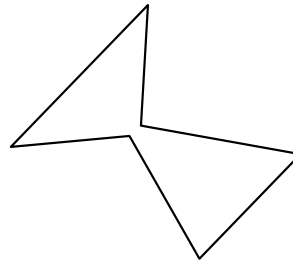
7)



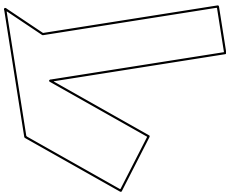
8)



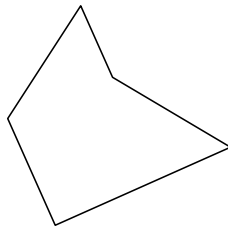
9)



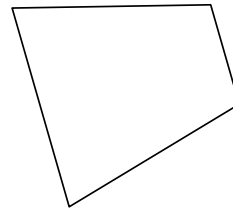
10)



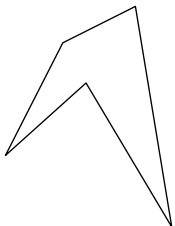
11)



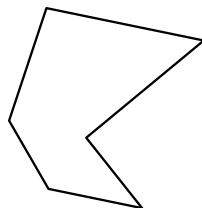
12)



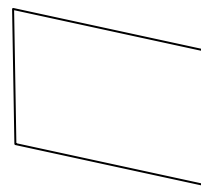
13)



14)



15)



Answers

1. quadrilateral

2. decagon

3. decagon

4. octagon

5. quadrilateral

6. heptagon

7. hexagon

8. octagon

9. hexagon

10. octagon

11. pentagon

12. quadrilateral

13. pentagon

14. hexagon

15. quadrilateral